


# Numération et calcul

## Bilan 1

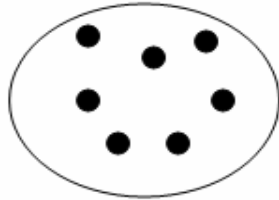
### 1- Dictée de nombres

--	--	--	--	--

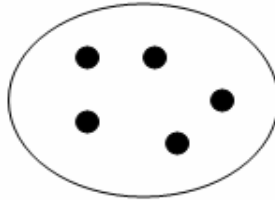
### 2- Ecris le nombre de billes (dénombrer une collection) :




\_\_\_\_\_



\_\_\_\_\_



\_\_\_\_\_



\_\_\_\_\_

### 3- Relie les nombres du plus petit au plus grand (ordonner les nombres dans l'ordre croissant) :

5                      9                      13                      16  
7                      10                      15                      17  
6                      8                      11                      12                      14                      18

### 4- Dessine les bougies qui manquent (compléter une collection) :



Johan a 6 ans.





Vincent a 8 ans.





Jessica a 5 ans.

### 5- Observe et complète l'addition (écrire la somme de deux nombres) :

      $\_ + \_ = \square$

      $\_ + \_ = \square$

      $\_ + \_ = \square$