


Comparer des quantités

Autant que


1- Dessine **autant de** soleils que de nuages



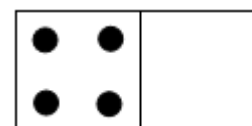

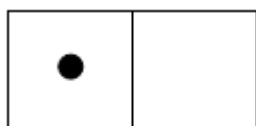
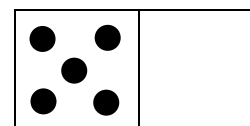

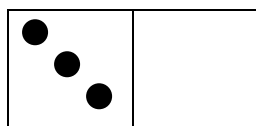

2- Y'a-t-il **autant de** chaises que d'enfants ? Entoure OUI ou NON



3- Dessine **autant de** carottes que de lapins




4- Dessine **autant de** points indiqués dans chaque domino



Comparer des quantités

Autant que




Nombre de nuages  : _____

Nombre de soleils  : _____

Il y a **autant** de nuages  **que** de soleils  .

Comparer des quantités

Autant que



Nombre de nuages  : _____

Nombre de soleils  : _____

Il y a **autant** de nuages  **que** de soleils  .